

**PESHA WARMODELSCHOOL**  
**SECOND HOME TASK FOR CLASS III**  
**MAY 2020**

Name: \_\_\_\_\_ Class: III Sec: \_\_\_\_\_

**Respected Parents,**

You are requested to motivate and engage your child towards academics during holidays.

**Note :**

1. Keep booklet neat and tidy.
2. Focus on neat handwriting.
3. Reading should be done on regular basis.
4. Dictation in English and urdu language should be taken to improve your child's vocabulary.

**Time table for Home task**

Note:-Keep your child busy in reading and written work at least for an hour daily.

<b>Days</b>	<b>Subject</b>	<b>Subjects</b>
Monday	English (Written)	Urdu (written)
Tuesday	Maths (Written)	Science
Wednesday	S.St (Written)	English (written)
Thursday	Islamiyat (Oral)	Urdu (Dictation + Reading)
Friday	Urdu (Written)	Maths (Tables Test)
Saturday	English (Written)	Urdu(written)

**Principal**

## PESHAWAR MODEL SCHOOL

Tele Boys (I) 5200166, Boys (II) 5602577, Boys (III) 2043865, Boys (IV) 2049296, Boys (V) 2671237, Boys (VI) 5510775 Girls I: 5200782, Girls II 2920946, Girls-III, 0333-0559991-5, Hayatabad Campus(Boys) 0343-2000333, Hayatabad Campus(Girls)0336-9123111, Charsadda Br 6511577, Mardan Br (0937) 874859, Nowshera (0923) 644129, Swabi Campus 0347-2000444, Shabqadar Br 0346-1119505, Girls- V 0346-1119506

### **WORK FROM HOME PROJECT**

**(Second Assignment for May, 2020)**

**CLASS III**

Dear parents,

It is the **2<sup>nd</sup> Assignment of Work from Home** project .We are thankful for your cooperation and appreciating response for the first assignment.

Hopefully all the students have completed first assignment and they are benefiting from our E- learning program as well. Although the life has come to a standstill due to the prevailing pandemic, we desperately want to get it back on the track .We wish and pray that school bustles start once again.

Stay safe and engage your child in studies and other healthy activities so that their precious time should not be wasted.

**Note:-** This assignment also carries **50 marks** which will be included in Mid Term examination result

**PRINCIPAL**

**برائے جماعت سوئم مئی 2020**

**اسلامیات : (ناظرہ)**

پہلا تا چہارم کلمہ بمعہ تراجم

سورۃ الہب بمعہ ترجمہ

**دعائیں:**

**i.** کھانا کھانے سے پہلے کی دعا

**ii.** کھانا کھانے کے بعد کی دعا

**iii.** علم میں اضافے کی دعا

**iv.** نماز : تکبیر تا سجدہ یاد کریں۔

**PESHAWAR MODEL SCHOOL**  
**SECOND HOME TASK FOR CLASS III**  
**FOR THE MONTH OF MAY 2020**

**ENGLISH**

**Unit: 3**

**The Apple**  
**Hand writing**

**Q1: I drew a door and windows.**

1.	
2.	
3.	
4.	
5.	

**Q2: Write the plurals of**

	<b>Singular</b>	<b>Plural</b>
i.	<b>foot</b>	

ii.	<b>friend</b>	

iii.	<b>bus</b>	

iv.	<b>city</b>	

v.	<b>town</b>	

### Q3: Write the feminine of

	<b>Masculine</b>	<b>Feminine</b>
i.	<b>hunter</b>	

ii.	<b>uncle</b>	

iii.	<b>brother</b>	

iv.	<b>bull</b>	

v	<b>horse</b>	

### Q4: Write the Forms of Verb.

	<b>1<sup>st</sup> Form</b>	<b>2<sup>nd</sup> Form</b>	<b>3<sup>rd</sup> Form</b>
i.	<b>jump</b>		

ii.	<b>smile</b>		

iii.	<b>talk</b>		

iv.	<b>stop</b>		

v.	<b>write</b>		

**Q1: Choose the correct answer and write under the given questions.**

1. The bus conductor collects the bus fares.
2. There was no door in the old buses.
3. People walked or used bicycles, horses or donkeys to travel before cars and buses.
4. The conductor has a bag of money and tickets.

**A. What was not there in old buses?**

<b>Ans:</b>	

**B. Who collect the bus fares?**

<b>Ans:</b>	

**C. What does the conductor have?**

<b>Ans:</b>	

**D. How did people travel before cars and buses?**

<b>Ans:</b>	

**Q.2: under line verbs in the given passage and write them in given space below.**

The driver does not collect the fares. The conductor goes to every passenger and gives them the tickets. The passenger gets up from the seats and get down when their stop comes. The driver starts again and moves on.

1. 


2. 


3. 


4. 


5. 


6. 


**Q3:- Write the words that match the clues:**

driver, pilot, teacher, jockey, sailor, footballer,  
nurse, swimmer, farmer, mechanic.

i.	<b>hospital</b>		ii.	<b>plane</b>	

iii.	<b>pool</b>		iv.	<b>horse</b>	

v.	<b>bus</b>		vi.	<b>garage</b>	

vii.	<b>school</b>		viii.	<b>field</b>	

ix.	<b>tractor</b>		x.	<b>boat</b>	

**Q4. Write five sentences on “My favourite toy”.**

1.	
2.	
3.	
4.	
5.	

**Q.5: Make sentences.**

	<b>Word</b>	<b>Sentences</b>
1.	<b>coat</b>	
2.	<b>buttons</b>	
3.	<b>apple</b>	
4.	<b>sun</b>	
5.	<b>tired</b>	

**PESHAWAR MODEL SCHOOL**  
**SECOND HOME TASK FOR CLASS III**  
**FOR THE MONTH OF MAY 2020**  
**MATHS**

**Q.1 Add them.**

$$\begin{array}{r} \text{a)} \\ + \\ 4 \quad 0 \quad 1 \\ 2 \quad 5 \quad 6 \\ \hline \\ \hline \end{array}$$

$$\begin{array}{r} \text{b)} \\ + \\ 2 \quad 3 \quad 4 \\ 7 \quad 6 \quad 2 \\ \hline \\ \hline \end{array}$$

$$\begin{array}{r} \text{c)} \\ + \\ 1 \quad 2 \quad 1 \quad 3 \\ 6 \quad 1 \quad 4 \quad 1 \\ 2 \quad 1 \quad 0 \quad 3 \\ \hline \\ \hline \end{array}$$

$$\begin{array}{r} \text{d)} \\ + \\ 4 \quad 0 \quad 2 \quad 1 \\ 3 \quad 1 \quad 6 \quad 0 \\ 2 \quad 8 \quad 0 \quad 7 \\ \hline \\ \hline \end{array}$$

**Q.2 Subtract them.**

$$\begin{array}{r} \text{a)} \\ - \\ 3 \quad 6 \quad 3 \\ 2 \quad 3 \quad 1 \\ \hline \\ \hline \end{array}$$

$$\begin{array}{r} \text{a)} \\ - \\ 7 \quad 6 \quad 8 \\ 5 \quad 4 \quad 3 \\ \hline \\ \hline \end{array}$$

$$\begin{array}{r} \text{c)} \\ - \\ 9 \quad 2 \quad 6 \quad 4 \\ 3 \quad 0 \quad 7 \quad 4 \\ \hline \\ \hline \end{array}$$

$$\begin{array}{r} \text{c)} \\ - \\ 8 \quad 3 \quad 3 \quad 3 \\ 4 \quad 5 \quad 5 \quad 5 \\ \hline \\ \hline \end{array}$$



**Q.3 Multiply them.**

$$\begin{array}{r} \text{a)} \quad \quad 8 \\ \times \quad 2 \\ \hline \\ \hline \end{array}$$

$$\begin{array}{r} \text{b)} \quad \quad 9 \\ \times \quad 4 \\ \hline \\ \hline \end{array}$$

$$\begin{array}{r} \text{c)} \quad \quad 7 \\ \times \quad 5 \\ \hline \\ \hline \end{array}$$

$$\begin{array}{r} \text{d)} \quad \quad 6 \\ \times \quad 3 \\ \hline \\ \hline \end{array}$$

**Q.4 Divide them.**

$$\text{a)} \quad 7 \overline{) 35}$$

$$\text{b)} \quad 6 \overline{) 42}$$

$$\text{c)} \quad 2 \overline{) 14}$$

$$\text{d)} \quad 3 \overline{) 27}$$

**Q.5 Complete the table by writing numbers in descending order .  
First one is done for you.**

<b>i.</b>	90	89								
<b>ii.</b>	135	134								
<b>iii.</b>	347	346								
<b>iv.</b>	4354	4353								
<b>v.</b>	50	49								
<b>vi.</b>	200	199								
<b>vii.</b>	105	104								
<b>viii.</b>	269	268								
<b>ix.</b>	370	369								
<b>x.</b>	420	419								

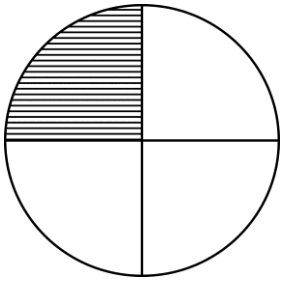
**Q.6 Colour the Even numbers in red:**

**(Hint: All the numbers whose ones digit is 0,2,4,6 or 8 are called Even numbers.).**

<b>1</b>	<b>2</b>	<b>3</b>	<b>4</b>	<b>5</b>	<b>6</b>	<b>7</b>	<b>8</b>	<b>9</b>	<b>10</b>
<b>11</b>	<b>12</b>	<b>13</b>	<b>14</b>	<b>15</b>	<b>16</b>	<b>17</b>	<b>18</b>	<b>19</b>	<b>20</b>
<b>21</b>	<b>22</b>	<b>23</b>	<b>24</b>	<b>25</b>	<b>26</b>	<b>27</b>	<b>28</b>	<b>29</b>	<b>30</b>
<b>31</b>	<b>32</b>	<b>33</b>	<b>34</b>	<b>35</b>	<b>36</b>	<b>37</b>	<b>38</b>	<b>39</b>	<b>40</b>
<b>41</b>	<b>42</b>	<b>43</b>	<b>44</b>	<b>45</b>	<b>46</b>	<b>47</b>	<b>48</b>	<b>49</b>	<b>50</b>
<b>51</b>	<b>52</b>	<b>53</b>	<b>54</b>	<b>55</b>	<b>56</b>	<b>57</b>	<b>58</b>	<b>59</b>	<b>60</b>
<b>61</b>	<b>62</b>	<b>63</b>	<b>64</b>	<b>65</b>	<b>66</b>	<b>67</b>	<b>68</b>	<b>69</b>	<b>70</b>

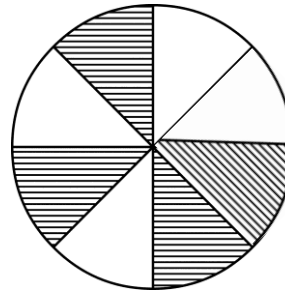
**Q7:- Write the fraction for the coloured parts. First one is done for you:**

a)



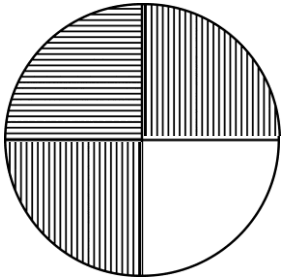
=  $\frac{1}{4}$

b)



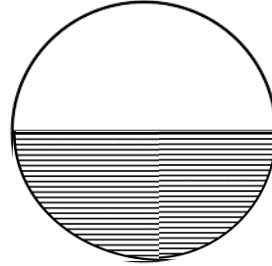
= \_\_\_\_\_

a)



= \_\_\_\_\_

b)




= \_\_\_\_\_

**Q8 :Solve the following using mental strategy.**

9	×	3	=	_____
4	×	5	=	_____
10	×	5	=	_____
4	×	7	=	_____
3	×	7	=	_____
9	×	7	=	_____
6	×	9	=	_____


**Q9:- Draw the hands of the clock to show the given time.**

a)




**4:15**

b)



**6:10**

b)



**8:45**

**Q10:- Write the following Tables:**

**Table of 8**

8	×	1	=	_____
8	×	2	=	_____
			=	_____
			=	_____
			=	_____
			=	_____
			=	_____
			=	_____
			=	_____
			=	_____

**Table of 9**

9	×	1	=	_____
9	×	2	=	_____
			=	_____
			=	_____
			=	_____
			=	_____
			=	_____
			=	_____
			=	_____
			=	_____

**PESHAWAR MODEL SCHOOL**  
**SECOND HOME TASK FOR CLASS III**  
**FOR THE MONTH OF MAY 2020**  
**SOCIAL STUDIES**

**Note:-Do reading of Unit 6+8**

**Q1:- Guess who they are with the help of given hints.**

**i.**


- a. keeps us safe**
- b. looks after the law**
- c. police station**

**ii.**


- a. is not a doctor**
- b. hospital**
- c. looks after patients**

**iii.**


- a. wears a helmet**
- b. travels in a fire engine**
- c. uses long hoses**

**Q2: Fill in the blanks:**

**i.** The 


 directs traffic on the road.

**ii.** A fire fighter wears a 


 to protect his head and neck.

**iii.** If there is a dangerous fire in your house, the 


 can be called to put it out.

**Q3: Write the names of any five jobs:**

**For example:** Teacher, Soldier

i. 


ii. 


iii. 


iv. 


v. 


**Q4: Match the following professions with their descriptions:**

<b>Column – A</b>	<b>Column – B</b>
a). <b>An actor</b>	<b>works on a ship</b>
b). <b>An astronomer</b>	<b>makes bread and cakes</b>
c). <b>A dentist</b>	<b>works with accounts</b>
d). <b>A sailor</b>	<b>studies the stars</b>
e). <b>A soldier</b>	<b>flies aeroplanes</b>
f). <b>An accountant</b>	<b>acts in plays and films</b>
g). <b>A baker</b>	<b>defends the country</b>
h). <b>A pilot</b>	<b>cooks food</b>
i). <b>A chef</b>	<b>check people's teeth</b>

**Q5: What does your father do? (Write three sentences about it).**

i. 


ii. 


iii. 




اردو گھر کا کام

جماعت سوئم

مئی 2020

سبق: جشنِ آزادی مبارک

س1:- مندرجہ ذیل بیانات کو منتخب کر کے دیئے گئے سوالات کے نیچے لکھیں۔

- (i) جشنِ آزادی 14 اگست کو منائی جاتی ہے۔  
(ii) 1947ء سے پہلے کے ہندوستان میں ہندو مسلمان ، سکھ ، عیسائی اور دوسرے مذاہب کے لوگ رہتے تھے۔  
(iii) مسلمانوں نے پاکستان دن رات کی محنت سے حاصل کیا۔  
(iv) شرفو چاچا کی دوکان سے بچے سبز بیج خرید رہے تھے۔  
(v) ہمارے ملک کا نام پاکستان ہے۔

س1:- 1947ء سے پہلے کے ہندوستان میں کون کونسے مذاہب کے لوگ رہتے تھے؟

ج:-

س2:- مسلمانوں نے پاکستان کیسے حاصل کیا؟

ج:-

س3:- جشنِ آزادی کب منائی جاتی ہے؟

ج:-

س4:- شرفو چاچا کی دوکان سے بچے کیا خرید رہے تھے؟

ج:-

س5:- ہمارے ملک کا کیا نام ہے؟

ج:-

س2: سبز ہلالی پرچم بنائیں اور رنگ بھریں۔

--



س 3:- ہم آواز الفاظ بنائیں۔

جیسے

شجر

---

فجر

رات

دن

جان

غم

---

---

---

---

س 4: موسم سرما (سردی) کے پانچ خشک میوہ جات لکھیں اور تصاویر بنائیں۔

1.

---

2.

---

3.

---

4.

---

5.

---

س 5:- درست الفاظ چُن کر جملے مکمل کریں۔

1. ہم جشنِ آزادی \_\_\_\_\_ میں مناتے ہیں

1. مارچ

2. اگست

11.

بیج پر پاکستان کا \_\_\_\_\_ کھدا ہوا تھا۔

1. پرچم۔

2. نقشہ۔

III. پاکستان 14 اگست \_\_\_\_\_ کو آزاد ہوا۔  
1-1940  
2-1947

IV. قائد اعظم \_\_\_\_\_ کے رہنما تھے۔  
1-مسلمانوں۔  
2-انگریزوں۔

V. اللہ پاکستان کو \_\_\_\_\_ رکھے (آمین)  
1-سلامت  
2-خوش۔

س6:- الفاظ کے جملے لکھیں۔

جملے	الفاظ
	1- جشن
	2- پاکستان
	3- نعمت
	4- مذہب
	5- قانون

س7:- اُلٹ معنی والے الفاظ کے جوڑ ملائیں۔

الفاظ	معنی
1- آزادی	تکلیف
2- خوشی	مردہ
3- زندہ	مغلامی
4- نئی	غم
5- آرام	پرانی
6- پہلی	آخری

س8:- تخلیقی تحریر

"میرا سکول"

س9:- خوشخط لکھیں

زندہ قومیں اپنی آزادی کا جشن  
منہ کر ہمیشہ زندہ رہتی ہیں۔

1. \_\_\_\_\_
2. \_\_\_\_\_
3. \_\_\_\_\_
4. \_\_\_\_\_
5. \_\_\_\_\_

**PESHAWAR MODEL SCHOOL**  
**SECOND HOME TASK FOR CLASS III**  
**FOR THE MONTH OF MAY 2020**  
**SOCIAL STUDIES**

**Note:-Do reading of Unit 6+8**

**Q1:- Guess who they are with the help of given hints.**

**i.**


- a. keeps us safe**
- b. looks after the law**
- c. police station**

**ii.**


- a. is not a doctor**
- b. hospital**
- c. looks after patients**

**iii.**


- a. wears a helmet**
- b. travels in a fire engine**
- c. uses long hoses**

**Q2: Fill in the blanks:**

**i.** The 


 directs traffic on the road.

**ii.** A fire fighter wears a 


 to protect his head and neck.

**iii.** If there is a dangerous fire in your house, the 


 can be called to put it out.

**Q3: Write the names of any five jobs:**

**For example:** Teacher, Soldier

i. 


ii. 


iii. 


iv. 


v. 


**Q4: Match the following professions with their descriptions:**

<b>Column – A</b>	<b>Column – B</b>
a). An actor	works on a ship
b). An astronomer	makes bread and cakes
c). A dentist	works with accounts
d). A sailor	studies the stars
e). A soldier	flies aeroplanes
f). An accountant	acts in plays and films
g). A baker	defends the country
h). A pilot	cooks food
i). A chef	check people's teeth

**Q5: What does your father do? (Write three sentences about it).**

i. 


ii. 


iii. 




**PESHAWAR MODEL SCHOOL**  
**SECOND HOME TASK FOR CLASS III**  
**FOR THE MONTH OF MAY 2020**  
**GENERAL SCIENCE**

**Q1: Choose the correct answer:**

**i. What do flowers grow into?**

- a. buds      b. seeds      c. fruit      d. root

**ii. What does a seed need to grow?**

- a. soil                      b. water  
c. air                      d. good soil, water, sunlight

**iii. Which of these has a largest seed?**

- a. mango      b. apple      c. grape      d. peach

**iv. Which of the following is magnetic?**

- a. glass      b. iron      c. wood      d. plastic

**v. Which of these vegetables is really a fruit?**

- a. tomato      b. carrot      c. potato      d. cabbage

**Q2: Match the following :**

Column – A	Column – B
a). tomato	root
b). carrot	leaf bud
c). pea	flower bud
d). lettuce	seed
e) cauliflower	fruit

**Q3:- Re-arrange the letters to make words:**

**ORSOT:**

\_\_\_\_\_

**METS:**

\_\_\_\_\_


**FLEA:**

\_\_\_\_\_

**OWFLRE:**

\_\_\_\_\_

**Hint:**



**Q4: Draw , Colour and lable the life cycle of a frog: (Book pg 37)**

**Q5: Draw two magnetic and two non- magnetic materials.**

**MAGNETIC**

**NON- MAGNETIC**